

Similarity

Exercise -13

1. Given that $\triangle ABC$ and $\triangle PQR$ are similar. find
- (i) The ratio of the area of $\triangle ABC$ to the area of $\triangle PQR$ if their corresponding sides are in the ratio 1:3.
 - (ii) The ratio of their corresponding sides if area of $\triangle ABC$: area of $\triangle PQR = 25 : 36$.

Sol.

(i) $\therefore \triangle ABC \sim \triangle PQR$

$$\frac{\text{area of } \triangle ABC}{\text{area of } \triangle PQR} = \frac{BC^2}{QR^2}$$

(The ratio of the area of the similar triangles is equal to the ratio of the squares of any two corresponding sides.)

But $BC : QR = 1 : 3$

$$\frac{\text{area of } \triangle ABC}{\text{area of } \triangle PQR} = \frac{(1)^2}{(3)^2} = \frac{1}{9}$$

(ii) $\therefore \triangle ABC \sim \triangle PQR$, $\frac{\text{area of } \triangle ABC}{\text{area of } \triangle PQR} = \frac{BC^2}{QR^2}$

But, area of $\triangle ABC$: area of $\triangle PQR = 25 : 36$

$$\frac{BC^2}{QR^2} = \frac{25}{36} \Rightarrow \left(\frac{BC}{QR}\right)^2 = \left(\frac{5}{6}\right)^2 \Rightarrow \frac{BC}{QR} = \frac{5}{6}$$

$$\therefore BC : QR = 5 : 6$$

2. $\triangle ABC \sim \triangle DEF$. If area of $\triangle ABC = 9 \text{ cm}^2$, area of $\triangle DEF = 16 \text{ cm}^2$ and $BC = 2.1 \text{ cm}$, find the length of EF .

Sol.

let $EF = x$, $\triangle ABC \sim \triangle DEF$

$$\frac{\text{area of } \triangle ABC}{\text{area of } \triangle DEF} = \frac{BC^2}{EF^2} \Rightarrow \frac{9}{16} = \frac{BC^2}{EF^2}$$

$$\Rightarrow \frac{(2.1)^2}{x^2} = \frac{9}{16} \Rightarrow \frac{2.1}{x} = \frac{3}{4} \Rightarrow 3x = 4 \times 2.1$$

$$\Rightarrow x = \frac{4 \times 2.1}{3} = 2.8 \text{ cm.}$$

Hence $EF = 2.8 \text{ cm}$.

3. $\triangle ABC \sim \triangle DEF$. If $BC = 3 \text{ cm}$, $EF = 4 \text{ cm}$ and area of $\triangle ABC = 54 \text{ cm}^2$. Determine the area of $\triangle DEF$.

Sol.

$$\frac{\text{area of } \triangle ABC}{\text{area of } \triangle DEF} = \frac{BC^2}{EF^2} \Rightarrow \frac{54}{\text{area of } \triangle DEF} = \frac{3^2}{4^2}$$

$$\Rightarrow \frac{54}{\text{area of } \triangle DEF} = \frac{9}{16} \Rightarrow \text{area of } \triangle DEF = \frac{54 \times 16}{9} = 96 \text{ cm}^2.$$

4. The area of two similar triangles are 36 cm^2 and 25 cm^2 . If altitude of the first triangle is 2.4 cm , find the corresponding altitude of the other triangle.

Sol.

let $ABC \sim DEF$, AL and DM are their altitudes
then area of $\triangle ABC = 36 \text{ cm}^2$.

area of $\triangle DEF = 25 \text{ cm}^2$ and $AL = 2.4 \text{ cm}$.

let $DM = x$, now $\triangle ABC \sim \triangle DEF$

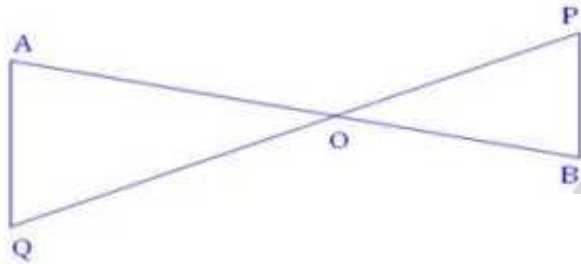
$$\therefore \frac{\text{area of } \triangle ABC}{\text{area of } \triangle DEF} = \frac{AL^2}{DM^2} \Rightarrow \frac{36}{25} = \frac{(2.4)^2}{x^2}$$

$$\Rightarrow \frac{2.4}{x} = \frac{6}{5} \Rightarrow x = \frac{2.4 \times 5}{6} = 2 \text{ cm.}$$

Hence altitude of the other triangle = 2 cm.

5. In the adjoining fig. PB and QA are perpendiculars to the line segment AB. If PO = 6 cm and QO = 9 cm and the area of $\triangle POB = 120 \text{ cm}^2$. Find the area of $\triangle QOA$.

Sol.



We know that the ratio of the areas of two similar triangles is equal to the ratio of the squares of any two corresponding sides.

$$\frac{\text{Area of } \triangle AOB}{\text{Area of } \triangle POB} = \frac{OQ^2}{OP^2} \quad (\because \angle A = \angle B, \angle AOB = \angle BOP)$$

$$\Rightarrow \frac{\text{Area of } \triangle AOB}{120} = \frac{9^2}{6^2}$$

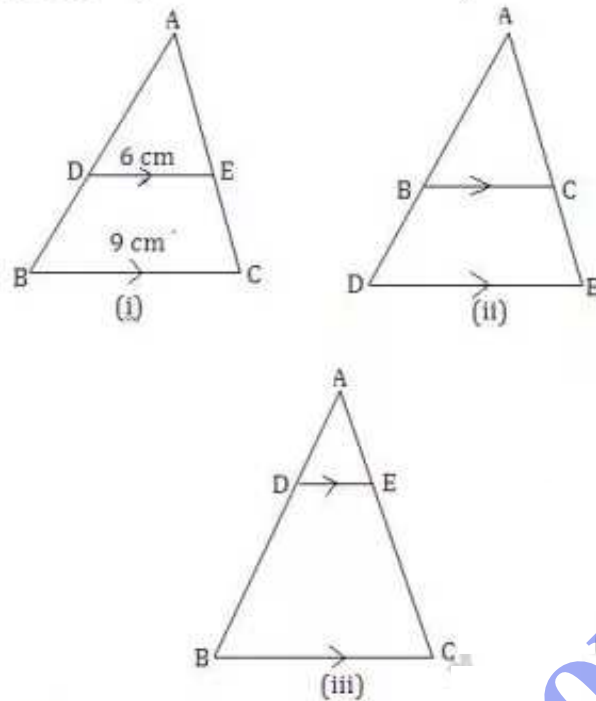
$$\Rightarrow \text{Area of } \triangle AOB = \frac{81}{36} \times 120 = 270 \text{ cm}^2$$

6. (a) In the fig (i) given below, $DE \parallel BC$. If $DE = 6 \text{ cm}$, $BC = 9 \text{ cm}$, and area of $\triangle ADE = 28 \text{ cm}^2$, find the area of $\triangle ABC$.

- (b) In the fig (ii) given below, BC is parallel to DE. Area of $\triangle ABC = 25 \text{ cm}^2$, area of trapezium BCED = 24 cm^2 , $DE = 14 \text{ cm}$. Calculate the length of BC.

(c) In the fig. (iii) given below, $DE \parallel BC$ and $AD:DB=1:2$ find the ratio of the areas of $\triangle ADE$ and trapezium $DBCE$.

Sol.



(a) In the fig. (i), $DE \parallel BC$, $\angle D = \angle B$ and $\angle E = \angle C$
(corresponding angles)

Now in $\triangle ADE$ and $\triangle ABC$, $\angle D = \angle B$, $\angle E = \angle C$ (proved)

$\angle A = \angle A$ (Common)

$\therefore \triangle ADE \sim \triangle ABC$ (AAA postulate)

$$\frac{\text{area of } \triangle ADE}{\text{area of } \triangle ABC} = \frac{DE^2}{BC^2} \Rightarrow \frac{28}{\text{area of } \triangle ABC} = \frac{6^2}{9^2} = \frac{36}{81}$$

$$\Rightarrow \text{area of } \triangle ABC = \frac{28 \times 81}{36} = 63$$

$$\therefore \text{area of } \triangle ABC = 63 \text{ cm}^2$$

(b) In the fig. (ii), $BC \parallel DE$, area of $\triangle ABC = 25 \text{ cm}^2$.

$$\text{area of trapezium } BCED = 24 \text{ cm}^2$$

$$DE = 14 \text{ cm and } BC = x \text{ (say)}$$

\therefore In $\triangle ADE$, $BC \parallel DE$, $\angle B = \angle D$, $\angle C = \angle E$

Now in $\triangle ABC$ and $\triangle ADE$, $\angle B = \angle D$, $\angle C = \angle E$ (proved)

$\angle A = \angle A$ (Common)

$\triangle ABC \sim \triangle ADE$ (AAA postulate)

$$\frac{\text{area of } \triangle ABC}{\text{area of } \triangle ADE} = \frac{BC^2}{DE^2} \Rightarrow \frac{25}{25+24} = \frac{x^2}{(14)^2}$$

$$\Rightarrow \frac{25}{49} = \frac{x^2}{196} \Rightarrow x^2 = \frac{25 \times 196}{49} = 100 \Rightarrow x = 10$$

\therefore Hence $BC = 10\text{cm}$.

(C) In the fig. (iii), $DE \parallel BC$

$\angle D = \angle B$ and $\angle E = \angle C$ (Corresponding angles)

Now in $\triangle ADE$ and $\triangle ABC$, $\angle D = \angle B$, $\angle E = \angle C$ (proved)

$\angle A = \angle A$ (Common)

$\triangle ADE \sim \triangle ABC$ (AAA postulate)

$$\text{But } \frac{AD}{DB} = \frac{1}{2} \Rightarrow \frac{DB}{AD} = \frac{2}{1} \Rightarrow \frac{DB}{AD} + 1 = \frac{2}{1} + 1$$

$$\Rightarrow \frac{AD+DB}{AD} = \frac{2+1}{1} \Rightarrow \frac{AB}{AD} = \frac{3}{1} \Rightarrow \frac{AD}{AB} = \frac{1}{3}$$

$\therefore \triangle ADE \sim \triangle ABC$

$$\frac{\text{area of } \triangle ADE}{\text{area of } \triangle ABC} = \frac{AD^2}{AB^2} = \left(\frac{1}{3}\right)^2 = \frac{1}{9}$$

$$\Rightarrow \text{area of } \triangle ABC = 9 \times \text{area of } \triangle ADE$$

\therefore area of trapezium $DBCE = \text{area of } \triangle ABC - \text{area of } \triangle ADE$

$$= 9 \times \text{area of } \triangle ADE - \text{area of } \triangle ADE$$

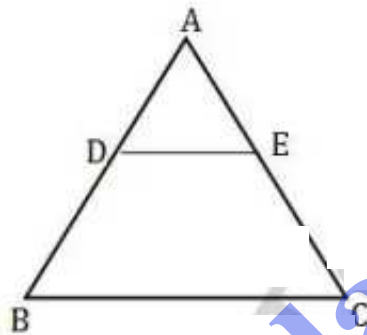
$$= 8 \times \text{area of } \triangle ADE$$

$$\frac{\text{area of } \triangle ADE}{\text{area of trapezium DBCE}} = \frac{1}{8}$$

7. In the given fig, $DE \parallel BC$

- (i) prove that $\triangle ADE$ and $\triangle ABC$ are similar.
 (ii) Given that $AD = \frac{1}{2} BD$, calculate DE , if $BC = 4.5$
 (iii) If area of $\triangle ABC = 18 \text{ cm}^2$, find the area of trapezium DBCE.

Sol.



(i) In $\triangle ADE$ and $\triangle ABC$, $\angle A = \angle A$ (common)

$\angle D = \angle B$, $\angle E = \angle C$ (corresponding angles)

$\therefore \triangle ADE \sim \triangle ABC$.

$$\begin{aligned} \text{(ii)} \quad \frac{AD}{DB} = \frac{1}{2} &\Rightarrow \frac{DB}{AD} = \frac{2}{1} \Rightarrow \frac{DB}{AD} + 1 = \frac{2}{1} + 1 \\ &\Rightarrow \frac{AD + DB}{AD} = \frac{2+1}{1} \Rightarrow \frac{AB}{AD} = \frac{3}{1} \Rightarrow \frac{AD}{AB} = \frac{1}{3} \end{aligned}$$

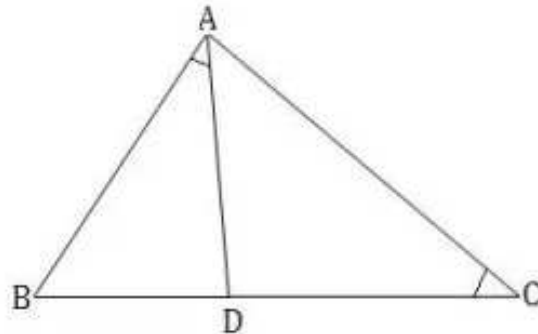
$$\frac{\text{area of } \triangle ADE}{\text{area of } \triangle ABC} = \frac{AD^2}{AB^2} \Rightarrow \frac{DE^2}{BC^2} = \frac{AD^2}{AB^2} \Rightarrow \frac{DE^2}{(4.5)^2} = \left(\frac{1}{3}\right)^2$$

$$\Rightarrow \frac{DE^2}{(4.5)^2} = \frac{1}{9} \Rightarrow DE = \frac{4.5}{3} = 1.5 \text{ cm.}$$

(iii) area of $\triangle ABC = 9 \times \text{area of } \triangle ADE$

$$\text{area of trapezium DBCE} = \triangle ABC - \triangle ADE = 16 \text{ cm}^2.$$

8. In the adjoining fig., D is a point on BC such that $\angle BAD = \angle C$ and $AB = 7\text{cm}$, $BD = 4\text{cm}$.



- (i) prove that $\triangle ABD \sim \triangle ABC$
 (ii) Find area of $\triangle ABC$: area of $\triangle ADC$.

Sol. In $\triangle ABD$ and $\triangle ABC$, $\angle BAD = \angle C$ (given)
 $\angle B = \angle B$ (Common)

$\therefore \triangle ABD \sim \triangle ABC$ (AA postulate)

$$\frac{\text{area of } \triangle ABD}{\text{area of } \triangle ABC} = \frac{BD^2}{AB^2} = \frac{4^2}{7^2} = \frac{16}{49}$$

$$\Rightarrow 16 \text{ area of } \triangle ABC = 49 \text{ area of } \triangle ABD.$$

$$= 49 (\text{area of } \triangle ABC - \text{area of } \triangle ADC)$$

$$= 49 \text{ area of } \triangle ABC - 49 \text{ area of } \triangle ADC$$

$$\Rightarrow 49 \text{ area of } \triangle ADC = 49 \text{ area of } \triangle ABC - 16 \text{ area of } \triangle ABC$$

$$\Rightarrow 49 \text{ area of } \triangle ADC = 33 \text{ area of } \triangle ABC$$

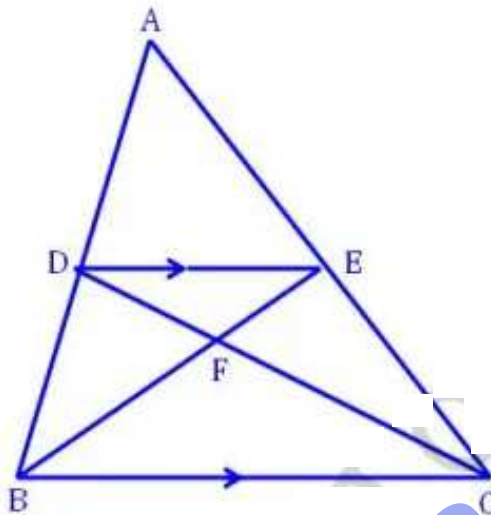
$$\Rightarrow \text{area of } \triangle ABC : \text{area of } \triangle ADC = 49 : 33.$$

9. In the given fig $\triangle ABC$ is a triangle. DE is parallel to BC and $\frac{AD}{DB} = \frac{3}{2}$

(i) Determine the ratios $\frac{AD}{AB}$, $\frac{DE}{BC}$.

(ii) prove that $\triangle DEF$ is similar to $\triangle CBF$, hence find $\frac{EF}{FB}$?

(iii) what is the ratio of the areas of $\triangle DEF$ and $\triangle BFC$?



sol. (i) $\frac{AD}{DB} = \frac{3}{2} \Rightarrow \frac{AD}{AD+DB} = \frac{3}{3+2} \Rightarrow \frac{AD}{AB} = \frac{3}{5}$

In $\triangle ADE$ and $\triangle ABC$, we have

$$\angle DAE = \angle BAC \text{ (common)}, \angle ADE = \angle ABC \text{ (corresponding angles)}$$

\therefore By AA criterion of similarity, $\triangle ADE \sim \triangle ABC$

$$\frac{DE}{BC} = \frac{AD}{AB} = \frac{3}{5}$$

(ii) In $\triangle DEF$ and $\triangle CBF$, we have

$$\angle EDF = \angle FCB, \angle DEF = \angle FCB$$

By AA criterion of similarity, $\triangle DEF \sim \triangle CBF$

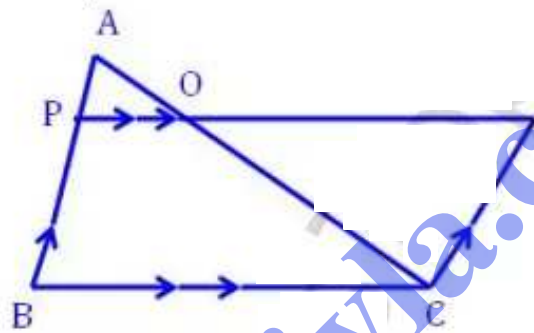
$$\frac{EF}{BF} = \frac{DE}{CB} = \frac{3}{5}$$

(iii) We know that the ratio of the areas of similar triangle is equal to the ratio of the squares of the corresponding sides. therefore

$$\frac{\text{Area of } \triangle DEF}{\text{Area of } \triangle ABC} = \frac{DE^2}{BC^2} = \left(\frac{DE}{BC}\right)^2 = \left(\frac{3}{5}\right)^2 = \frac{9}{25}$$

10. In $\triangle ABC$, $AP:PB = 2:3$ PO is parallel to BC and extended to Q so that CQ is parallel to BA . find:

- (i) area of $\triangle APO$: area of $\triangle ABC$
 (ii) area of $\triangle APO$: area of $\triangle CQO$



Sol. In $\triangle APO$ and $\triangle ABC$ $\angle A = \angle A$ (Common)
 $\angle 1 = \angle 2$, $\angle 3 = \angle 4$ (Corresponding angles)
 $\triangle APO \sim \triangle ABC$ (\therefore By AAA Similarity Axiom)
 Also, $\frac{AP}{PB} = \frac{2}{3} \Rightarrow \frac{PB}{AP} = \frac{3}{2} \Rightarrow \frac{PB}{AP} + 1 = \frac{3}{2} + 1$
 $\Rightarrow \frac{PB+AP}{AP} = \frac{3+2}{2} \Rightarrow \frac{AB}{AP} = \frac{5}{2} \Rightarrow \frac{AP}{AB} = \frac{2}{5}$
 Now, $\frac{\text{area of } \triangle APO}{\text{area of } \triangle ABC} = \frac{AP^2}{AB^2} = \left(\frac{2}{5}\right)^2 = \frac{4}{25}$

Again in $\triangle APO$ and $\triangle CQO$,

$\angle 1 = \angle 6$ (alternate internal angles)

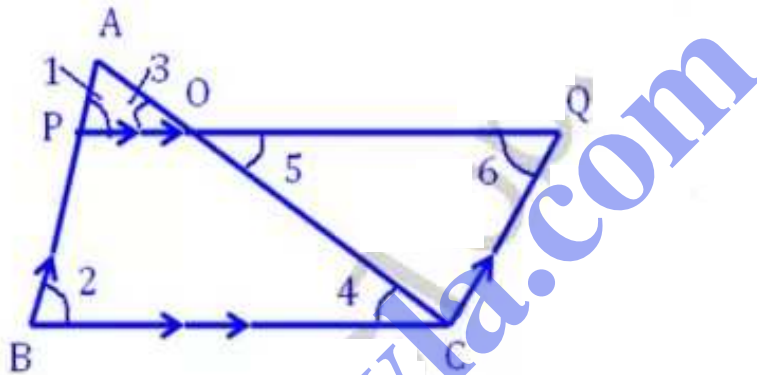
$\angle 3 = \angle 5$ (vertically opposite angles)

$\triangle APO \sim \triangle CQO$ (By AA similarity axiom)

$$\frac{AP}{CQ} = \frac{AO}{OC}$$

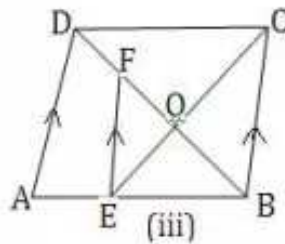
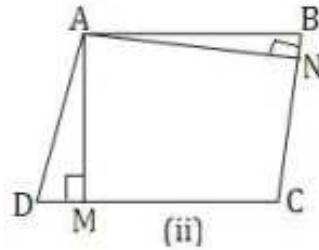
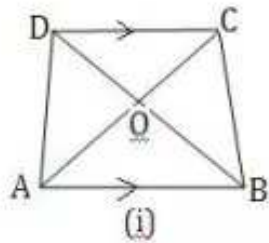
Also, $\frac{AP}{PB} = \frac{AO}{OC} = \frac{2}{3}$ [$\because PB = CQ$ opp. sides of a parallelogram]

$$\frac{\text{area of } \triangle APO}{\text{area of } \triangle CQO} = \frac{AO^2}{OC^2} = \left(\frac{AO}{OC}\right)^2 = \left(\frac{2}{3}\right)^2 = \frac{4}{9}$$



11. (a) In the fig. (i) given below, ABCE is a trapezium in which $AB \parallel DC$ and $AB = 2CD$. Determine the ratio of the area of $\triangle AOB$ and $\triangle COD$.
- (b) In the fig. (ii) given below, ABCD is a parallelogram, $AM \perp DC$ and $AN \perp CB$. If $AM = 6\text{cm}$, $AN = 10\text{cm}$ and the area of parallelogram ABCD is 45cm^2 , find:
 (i) AB (ii) BC (iii) area of $\triangle ADM$; area of $\triangle ANB$.
- (c) In the fig. (iii) given below, ABCD is a parallelogram E is a point on AB, CE intersects the diagonal BD at O and $EF \parallel BC$. If $AE : EB = 2 : 3$, find:
 (i) $EF : AD$ (ii) areas of $\triangle BEF$; area of $\triangle ABD$.
 (iii) area of $\triangle ABD$; area of trapezium AFED.

(iv) area of $\triangle FEO$: area of $\triangle OBC$.



Sol. (a) In trapezium ABCD, $AB \parallel DC$
 $\angle OAB = \angle OCD$ (alternate angles)
 $\angle OBA = \angle ODC$, $\triangle AOB \sim \triangle COD$.

$$\frac{\text{area of } \triangle AOB}{\text{area of } \triangle COD} = \frac{AB^2}{CD^2} = \frac{(2CD)^2}{CD^2} \quad (\because AB = 2CD)$$

$$= \frac{4CD^2}{CD^2} = \frac{4}{1}$$

area of $\triangle AOB$: area of $\triangle COD = 4 : 1$

(b) In parallelogram ABCD, $AM \perp DC$ and $AN \perp CB$

Now area of parallelogram ABCD = $DC \times AM$ or $BC \times AN$

$DC \times AM = BC \times AN = \text{Area of parallelogram}$

$$\Rightarrow DC \times 6 = BC \times 10 = 45$$

$$(i) DC = \frac{45}{6} = \frac{15}{2} = 7.5 \text{ cm} = AB.$$

($\because AB = DC$)

$$(ii) BC = \frac{45}{10} = 4.5 \text{ cm.}$$

(iii) Now in $\triangle ADM$ and $\triangle ABN$,

$$\angle D = \angle B \text{ (Opp. angles of a parallelogram)}$$

$$\angle M = \angle N \text{ (each } 90^\circ)$$

$$\therefore \triangle ADM \sim \triangle ABN, \quad \frac{\text{area of } \triangle ADM}{\text{area of } \triangle ABN} = \frac{AD^2}{AB^2}$$

$$\Rightarrow \frac{BC^2}{AB^2} = \frac{(4.5)^2}{(7.5)^2} = \frac{20.25}{56.25} = \frac{2025}{5625} = \frac{9}{25}$$

$$\therefore \text{Area of } \triangle ADM : \text{area of } \triangle ABN = 9 : 25$$

(C) In parallelogram ABCD, E is a point on AB, CE intersects the diagonal BD at O. $EF \parallel BC$ and $AE : EB = 2 : 3$.

In $\triangle ABD$, $EF \parallel BC \parallel AD$

$$(i) \frac{AB}{BE} = \frac{AD}{EF} \Rightarrow \frac{EF}{AD} = \frac{BE}{AB}$$

$$\text{But } \frac{AE}{EB} = \frac{2}{3} \Rightarrow \frac{AE}{EB} + 1 = \frac{2}{3} + 1 \Rightarrow \frac{AE + EB}{EB} = \frac{2 + 3}{3}$$

$$\Rightarrow \frac{AB}{EB} = \frac{5}{3} \Rightarrow \frac{EB}{AB} = \frac{3}{5} \Rightarrow \frac{EF}{AD} = \frac{BE}{AB} = \frac{3}{5}$$

$$\therefore EF : AD = 3 : 5$$

(ii) $\triangle BEF \sim \triangle ABD$,

$$\frac{\text{area of } \triangle BEF}{\text{area of } \triangle ABD} = \frac{(EF)^2}{(AD)^2} = \frac{3^2}{5^2} = \frac{9}{25}$$

$$\therefore \text{area of } \triangle BEF : \text{area of } \triangle ABD = 9 : 25$$

$$(iii) \frac{\text{Area of } \triangle ABD}{\text{Area of } \triangle BEF} = \frac{25}{9} \left\{ \because \text{from (ii)} \right\}$$

$$25 \text{ area of } \triangle BEF = 9 \text{ area of } \triangle ABD$$

$$\Rightarrow 25(\text{area of } \triangle ABD - \text{area of trap. AFED}) = 9 \text{ area of } \triangle ABD$$

$$\Rightarrow 25 \text{ area of } \triangle ABD - 9 \text{ area of } \triangle ABD = 25 \text{ area of trap. AFED.}$$

$$\Rightarrow 16 \text{ area of } \triangle ABD = 25 \text{ area of trap. AFED.}$$

$$\Rightarrow \frac{\text{area of } \triangle ABD}{\text{area of trap. AFED}} = \frac{25}{16}$$

(iv) In $\triangle FEO$ and $\triangle OBC$, $\angle EOF = \angle BOC$ (Vertically opp. angles)

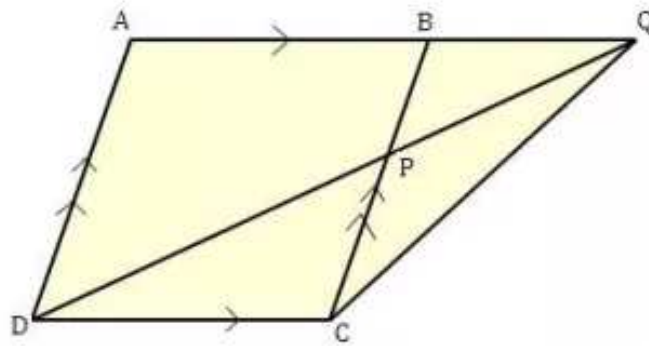
$\angle F = \angle OBC$ (alternate angles)

$\therefore \triangle FEO \sim \triangle OBC$

$$\frac{\text{area of } \triangle FEO}{\text{area of } \triangle OBC} = \frac{EF^2}{BC^2} = \frac{EF^2}{AD^2} = \frac{9}{25}$$

$$\therefore \text{area of } \triangle FEO : \text{area of } \triangle OBC = 9 : 25$$

12. In the adjoining fig ABCD is a parallelogram. P is a point on BC such that $BP:PC = 1:2$ and DP produced meets AB produced at Q. If the area of $\triangle CPQ = 20 \text{ cm}^2$, find (i) area of $\triangle BPQ$, (ii) area of $\triangle CDP$, (iii) area of parallelogram ABCD.



Sol.
$$\frac{\text{Area of } \triangle BPQ}{\text{Area of } \triangle CPQ} = \frac{\frac{1}{2} \times QN \times PB}{\frac{1}{2} \times QN \times PC}$$

Let area of $\triangle BPQ = x$

$$\Rightarrow \frac{x}{20} = \frac{PB}{PC} \quad [PB:PC = 1:2 \text{ (given)}]$$

$$\Rightarrow \frac{x}{20} = \frac{1}{2} \Rightarrow x = 10 \text{ cm}^2$$

(i) Area of $\triangle BPQ = 10 \text{ cm}^2$

In $\triangle BPQ$ and $\triangle CPD$

$\angle P = \angle P$ (vertically opp. angle)

$\angle PBC = \angle PCD$ (interior alternate angles)

$$\triangle BPQ \sim \triangle CPD \Rightarrow \frac{\text{Area of } \triangle BPQ}{\text{Area of } \triangle CPD} = \frac{BP^2}{CP^2}$$

$$\Rightarrow \frac{10}{\text{area of } \triangle CPD} = \frac{1}{4} \Rightarrow \text{area of } \triangle CPD = 40 \text{ cm}^2$$

Area of $\triangle CDQ = \text{Area of } \triangle CPD + \text{Area of } \triangle CPQ$

$$= 40 + 20 = 60 \text{ cm}^2$$

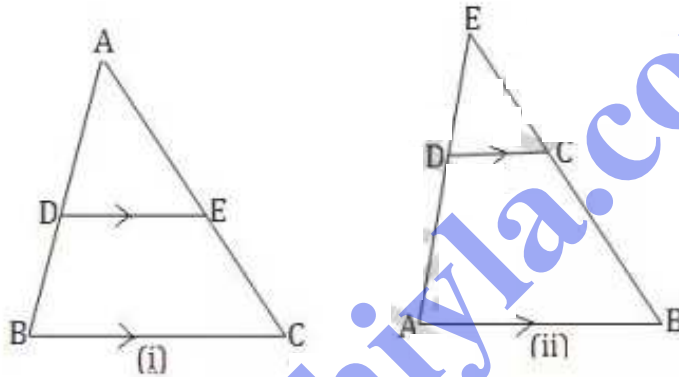
In $\triangle CDQ$; It has a similar base of parallelogram ABCD; i.e. CD; also the same height.

Area of $\triangle CDQ \times 2 =$ area of parallelogram ABCD.

$$\therefore \text{Area of } \parallel\text{ABCD} = 60 \times 2 = 120 \text{ cm}^2.$$

13. (a) In the fig(i) given below, $DE \parallel BC$ and the ratio of the areas of $\triangle ADE$ and trapezium DBCE is 4:5. find the ratio of $DE:BC$.

(b) In the fig(ii) given below, $AP \parallel BC$ and $AB = 2DC$. If $AD = 3\text{cm}$, $BC = 4\text{cm}$ and AD, BC produced meet at E, find (i) ED (ii) BE (iii) Area of $\triangle EDC$: area of trapezium ABCD.



Sol.

(a) In $\triangle ABC$, $DE \parallel BC$

Now in $\triangle ADC$ and $\triangle ADE$

$\angle A = \angle A$ (Common), $\angle B = \angle D$, $\angle C = \angle E$ (Corresponding angles)

$$\triangle ADE \sim \triangle ABC, \quad \frac{\text{area of } \triangle ADE}{\text{area of } \triangle ABC} = \frac{DE^2}{BC^2} \quad \text{--- (i)}$$

$$\text{But } \frac{\text{area of } \triangle ADE}{\text{area of trap. DBCE}} = \frac{4}{5} \Rightarrow \frac{\text{area of trap. DBCE}}{\text{area of } \triangle ADE} = \frac{5}{4}$$

$$\Rightarrow \frac{\text{Area of trap. DBCE}}{\text{Area of } \triangle ADE} + 1 = \frac{5}{4} + 1$$

$$\Rightarrow \frac{\text{Area of trap. DBCE} + \text{area of } \triangle ADE}{\text{area of } \triangle ADE} = \frac{5+4}{4} = \frac{9}{4}$$

$$\Rightarrow \frac{\text{Area of } \triangle ABC}{\text{Area of } \triangle ADE} = \frac{9}{4} \Rightarrow \frac{\text{Area of } \triangle ADE}{\text{Area of } \triangle ABC} = \frac{4}{9}$$

$$\text{Now from (i), } \frac{DE^2}{BC^2} = \frac{4}{9} = \left(\frac{2}{3}\right)^2 \Rightarrow \frac{DE}{BC} = \frac{2}{3}$$

(b) In the fig., $DC \parallel AB$, $AB = 2DC$

$$AD = 3\text{cm}, \quad BC = 4\text{cm}.$$

In $\triangle EAB$, $DC \parallel AB$

$$\frac{EA}{DA} = \frac{EB}{CB} = \frac{AB}{DC} = \frac{2DC}{DC} = \frac{2}{1}$$

$$(i) \quad EA = 2DA = 2 \times 3 = 6\text{cm}.$$

$$ED = EA - DA = 6 - 3 = 3\text{cm}.$$

$$(ii) \quad \frac{EB}{CB} = \frac{2}{1} \Rightarrow EB = 2CB = 2 \times 4 = 8\text{cm}.$$

$$\therefore BE = 8\text{cm}.$$

(iii) In $\triangle EAB$, $DC \parallel AB$

$$\triangle EDC \sim \triangle EAB, \quad \frac{\text{area of } \triangle EDC}{\text{area of } \triangle ABE} = \frac{DC^2}{AB^2} = \frac{DC^2}{(2DC)^2}$$

$$\frac{\text{area of } \triangle EDC}{\text{area of } \triangle ABE} = \frac{DC^2}{4DC^2} = \frac{1}{4}$$

$$\therefore \text{Area of } \triangle ABE = 4 \times \text{Area of } \triangle EDC.$$

$$\Rightarrow \text{area of } \triangle EDC + \text{area of trap. ABCD} = 4 \times \text{Area of } \triangle EDC.$$

$$\Rightarrow \text{Area of trap. ABCD} = 3 \times \text{Area of } \triangle EDC.$$

→ Area of $\triangle EDC$: area of trap. ABCD = 1 : 3

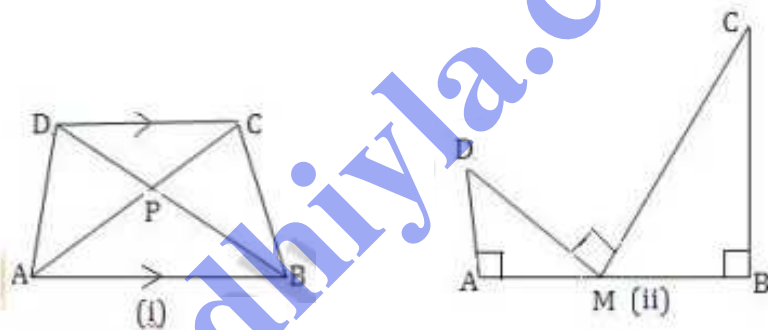
14. (a) In the fig. (i) given below, ABCD is a trapezium in which $DC \parallel AB$. If $AB = 9\text{ cm}$, $DC = 6\text{ cm}$ and $BD = 12\text{ cm}$, find (i) BP (ii) The ratio of areas of $\triangle APB$ and $\triangle DPC$.

(b) In the fig. (ii) given below, M is mid point of AB, $\angle A = \angle B = 90^\circ = \angle CMD$, prove that

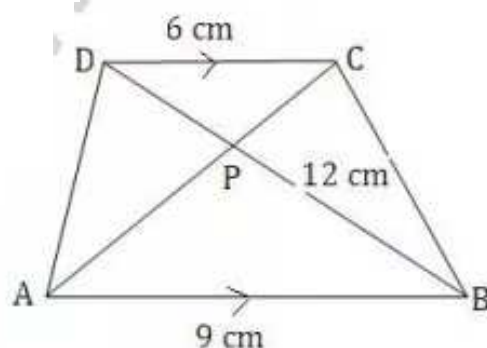
(i) $\triangle DAM$ is similar to $\triangle CMB$.

(ii) $\frac{\text{area of } \triangle DAM}{\text{area of trap } DCMB} = \frac{AD}{BC}$

(iii) $\frac{AD}{BC} = \frac{MD^2}{MC^2}$



Sol. In trapezium ABCD, $DC \parallel AB$.



$$AB = 9 \text{ cm}, DC = 6 \text{ cm}, BD = 12 \text{ cm}.$$

(i) In $\triangle APB$ and $\triangle CPD$, $\angle APB = \angle CPD$ (Vertically opp. angles)

$$\angle PAB = \angle PCD \text{ (alternate angles)}$$

$\triangle APB \sim \triangle CPD$ (AA postulate)

$$\frac{BP}{PD} = \frac{AB}{CD} \Rightarrow \frac{BP}{12 - BP} = \frac{9}{6}$$

$$\Rightarrow 6BP = 108 - 9BP \Rightarrow 15BP = 108 \Rightarrow BP = 7.2 \text{ cm}.$$

Again $\triangle APB \sim \triangle CPD$.

$$\frac{\text{Area of } \triangle APB}{\text{Area of } \triangle CPD} = \frac{AB^2}{CD^2} = \frac{9^2}{6^2} = \frac{81}{36} = \frac{9}{4}.$$

\therefore Area of $\triangle APB$: Area of $\triangle CPD = 9 : 4$

(b)

(i) $\angle CMD = 90^\circ$, $\angle A = \angle B = 90^\circ$

$$\angle AMD + \angle BMC = \angle AMD + \angle ADM = 90^\circ$$

$$\angle BMC = \angle ADM$$

Now in $\triangle DAM$ and $\triangle CMB$, $\angle A = \angle B = 90^\circ$

$$\angle ADM = \angle BMC \text{ (proved)}$$

$\therefore \triangle DAM \sim \triangle CMB$

$$(ii) \frac{\text{Area of } \triangle DAM}{\text{Area of } \triangle CMB} = \frac{\frac{1}{2} \times AM \times AD}{\frac{1}{2} \times BM \times BC} = \frac{\frac{1}{2} \times AM \times AD}{\frac{1}{2} \times AM \times BC}$$

$$= \frac{AD}{BC} \quad (\because AM = MB)$$

(iii) $\triangle DAM \sim \triangle CMB$ { prove in (i) }

$$\frac{\text{area of } \triangle DAM}{\text{area of } \triangle CMB} = \frac{MD^2}{MC^2}$$

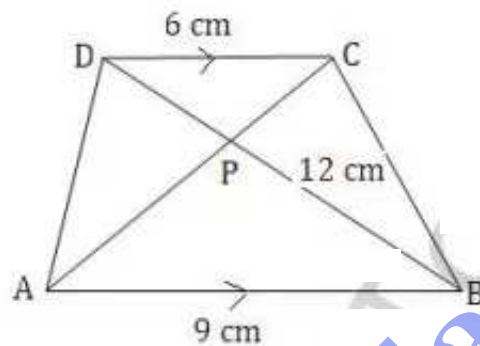
$$\text{But } \frac{\text{area of } \triangle DAM}{\text{area of } \triangle CMB} = \frac{AD}{BC}$$

{ prove in (ii) }

$$\therefore \frac{AD}{BC} = \frac{MD^2}{MC^2}$$

15. Two isosceles triangles have equal vertical angles and their areas are in the ratio 7:16. Find the ratio of their corresponding height.

Sol.



In two isosceles $\triangle ABC$ and $\triangle DEF$, $\angle A = \angle D$ (given)

$\angle B + \angle C = \angle E + \angle F$ But $\angle B = \angle C$ and $\angle E = \angle F$
(Opp. angles of equal sides)

$\angle B = \angle E$ and $\angle C = \angle F$

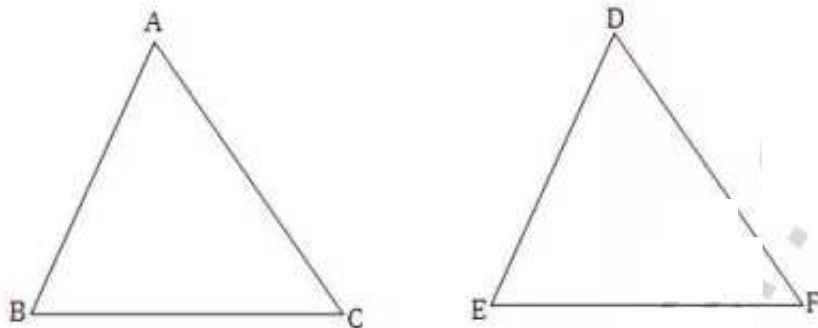
$$\triangle ABC \sim \triangle DEF, \quad \frac{\text{area of } \triangle ABC}{\text{area of } \triangle DEF} = \frac{AL^2}{DM^2} \Rightarrow \frac{AL^2}{DM^2} = \frac{7}{16}$$

$$\Rightarrow \frac{AL}{DM} = \frac{\sqrt{7}}{4}$$

Hence $AL : DM = \sqrt{7} : 4$

16. If the areas of two similar triangles are equal, prove that they are congruent.

Sol. Given $\triangle ABC \sim \triangle DEF$



and area of $\triangle ABC =$ area of $\triangle DEF$

To prove $\triangle ABC \cong \triangle DEF$

$$\frac{\text{area of } \triangle ABC}{\text{area of } \triangle DEF} = \frac{BC^2}{EF^2}$$

But area of $\triangle ABC =$ area of $\triangle DEF$ (given)

$$BC^2 = EF^2 \Rightarrow BC = EF$$

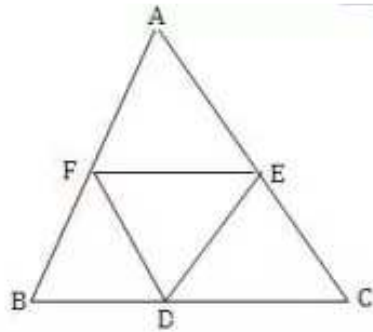
But $\angle B = \angle E$ and $\angle C = \angle F$ ($\because \triangle ABC \sim \triangle DEF$)

$\triangle ABC \cong \triangle DEF$ Hence proved.

17. D, E and F are midpoints of the sides of BC, CA and AB respectively of a $\triangle ABC$. Find the ratio of the areas of $\triangle DEF$ and $\triangle ABC$.

Sol. In $\triangle ABC$, D, E and F are midpoints of sides BC, CA and AB respectively. DE, EF and FD are joined.

\because E and F are the midpoints of AC and AB.



$EF \parallel BC$ and $EF = \frac{1}{2} BC$.

Similarly $FD \parallel AC$

$\therefore CDEF$ is a parallelogram. $\angle C = \angle F$

Similarly we can prove that $\angle A = \angle D$ and $\angle B = \angle E$

$\therefore \triangle DEF \sim \triangle ABC$

$$\frac{\text{area of } \triangle DEF}{\text{area of } \triangle ABC} = \frac{EF^2}{BC^2} = \frac{\left(\frac{1}{2}BC\right)^2}{BC^2} = \frac{1}{4} \cdot \frac{BC^2}{BC^2} = \frac{1}{4}$$

\therefore area of $\triangle DEF$: area of $\triangle ABC = 1 : 4$.

18. The volume of a machine is 27000 cm^3 . A model of the machine is made, the reduction factor being $2:15$. find the volume of the model.

sol. volume of machine = 27000 cm^3 .

and scale factor = $2:15$ or $\frac{2}{15}$

volume of model = k (volume of actual machine)

$$= \left(\frac{2}{15}\right)^3 \times 27000$$

$$= \frac{8}{15 \times 15 \times 15} \times 27000$$

$$= 64 \text{ cm}^3$$

- Q. The scale of map is 1:200000. A plot of land of area 20km^2 is to be represented on the map. find
- The no. of km's on the ground which is represented by 1cm on the map.
 - The area in km^2 that can be represented by 1cm^2 .
 - The area on the map that represents the plot of land.

Sol.

$$\text{Scale factor} = 1:200000 \quad \text{is} \quad k = \frac{1}{200000}$$

$$\text{Area of a plot of land} = 20\text{km}^2$$

$$\text{length on map} = 1\text{cm.}$$

$$(i) \text{ length of actual plot} = \frac{1}{k} (\text{length on map})$$

$$= 200000 \times 1\text{cm}$$

$$= \frac{200000}{100 \times 1000} \text{ km}$$

$$= 2\text{km.}$$

$$(ii) \text{ Area of map} = 1\text{cm}^2$$

$$\text{Area of actual plot} = \left(\frac{1}{k}\right)^2 (\text{Area on map})$$

$$= (200000)^2 (1\text{cm})^2$$

$$= \frac{200000 \times 200000}{100000 \times 100000} \text{ km}^2$$

$$= 4 \text{ km}^2$$

$$(iii) \text{ Area of plot} = 20\text{km}^2$$

$$\text{Area of map} = k^2 (\text{Area of plot of land})$$

$$= \frac{1}{(200000)^2} \times 20 \text{ km}^2$$

$$\begin{aligned}
 &= \frac{20}{200000 \times 200000} \text{ km}^2 \\
 &= \frac{20 \times 100000 \times 100000}{200000 \times 200000} \\
 &= 5 \text{ cm}^2
 \end{aligned}$$

20. on a map drawn to a scale of 1:250000, a triangular plot of land has the following measurements:

AB = 3cm, BC = 4cm, angle ABC = 90°. Calculate

- (i) The actual length of AB in km.
- (ii) The area of the plot in km².

Sol. Scale factor $k = 1:250000 = \frac{1}{250000}$

length on map.

AB = 3cm, BC = 4cm

∴ length of AB of actual plot = $\frac{1}{k}$ (length of AB on the map)

= 250000 (3cm)

= $\frac{250000 \times 3}{100 \times 1000} \text{ km}$

= $\frac{15}{2} = 7.5 \text{ km}$.

(ii) Area of plot on the map = $\frac{1}{2} \times AB \times BC$.

= $\frac{1}{2} \times 3 \times 4 = 6 \text{ cm}^2$.

Area of actual plot = $\frac{1}{k^2} \times 6 \text{ cm}^2$

= $(250000)^2 \times 6 \text{ cm}^2$

= $\frac{250000 \times 250000 \times 6}{100000 \times 100000} \text{ km}^2$

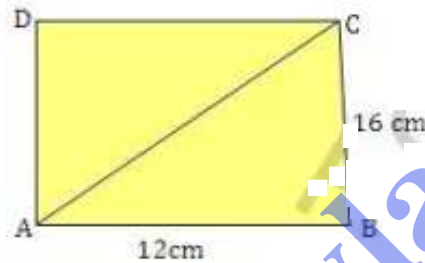
= $\frac{25}{4} \times 6 = \frac{75}{2} = 37.5 \text{ km}^2$

21. on a map drawn to a scale of 1:250000, a rectangular plot of land, ABCD has the following measurements, $AB = 12\text{cm}$ and $BC = 16\text{cm}$. Angles A, B, C and D are 90° each. Calculate:
- The distance of a diagonal of the plot in km.
 - The area of the plot in km^2 .

Sol.

$$\text{Scale factor } K = \frac{1}{250000}$$

Measurement of plot ABCD on the map are
 $AB = 12\text{cm}$ and $BC = 16\text{cm}$.



$$\begin{aligned} \text{Diagonal } AC &= \sqrt{AB^2 + BC^2} \\ &= \sqrt{12^2 + 16^2} \\ &= \sqrt{144 + 256} \\ &= \sqrt{400} \\ &= 20\text{ cm.} \end{aligned}$$

$$\begin{aligned} \text{and area} &= AB \times BC \\ &= 12 \times 16 \\ &= 192\text{ cm}^2. \end{aligned}$$

$$(i) \text{ Now actual length of AC} = \frac{1}{K}$$

(length of AC on map)

$$= 25000 \times 20 \text{ cm.}$$

$$= \frac{25000 \times 20}{100 \times 1000} \text{ km.}$$

$$= 5 \text{ km.}$$

$$(ii) \text{ Area of plot} = \left(\frac{1}{K}\right)^2 (\text{Area of plot on map})$$

$$= (25000)^2 \times 192 \text{ cm}^2$$

$$= \frac{25000 \times 25000 \times 192}{(100)^2 \times (1000)^2} \text{ km}^2$$

$$= 12 \text{ km}^2.$$

bodhiyla.com